

PRE SECONDARY SCHOLARSHIP EXAMINATION (Std. 8th), FEBRUARY 2018

Seat No.

--	--	--	--	--	--	--	--	--	--	--

0	5	2	2
---	---	---	---

Set

A

Paper No. II

Medium : English

Time : 1:30 to 3:00

Pages : 32

Third Language and Intelligence Test

Total Marks :150

Read the following instructions carefully before you answer the questions.

- (1) This question paper contains two sections. In Section I there are 1 to 25 questions of Third Language and in Section II there are 26 to 75 questions of Intelligence Test. All 75 questions are compulsory.
- (2) All questions carry 2 marks each.
- (3) Time limit to solve the question paper is 90 minutes.
- (4) Separate answer sheet is given to record the answers. Each question has been given four alternatives. Read them carefully. Select the correct answer and shade the correct answer in the answer sheet.
Example :- If the correct alternative for Q. No. 6 is 2, then record your answer as follows:
Question No. 6 ① ● ③ ④
- (5) Answer recorded in any other form will not be considered. Such answer will be credited with 'Zero' mark.
Example: ① ⊕ ② ⊖ ③ ⊙ ④ ⊗
- (6) While recording the correct option in the answer sheet, use only black or blue ball pen. Otherwise it will be credited as 'Zero' mark.
- (7) Answer once recorded cannot be changed.
- (8) Maximum 20% questions are having two correct alternatives. Candidate has to darken both the circles with correct answers. These questions will have the instruction 'Select two correct alternatives'.
- (9) Any kind of answers recorded in more than one circle will not be considered except for those questions having instruction 'Select two correct alternatives'.
- (10) The rough work is to be done in the box given under each page or on the last page of the question paper.
- (11) The exam has limited time, in case you are not able to solve a question, kindly solve the next question. In the end if time permits you can try to solve the unsolved questions.
- (12) If you find any question incomplete or with error, then do not ask anything to the Supervisor or Centre Incharge.
- (13) For any error/mistake/objection issues, school or parents should not send written application to Block Education Officer or Education Officer. These error/ mistake/objection issues should be register online through respective school login only.
- (14) The error/ mistake/ objection issues should be register online within 10-days from the publication of Interim answer key on MSCE website.
- (15) Questions can be cancelled due to printing mistake or any other reason, on the basis of the suggestions given by the Committee of Experts.
- (16) Along with the question paper of the respective medium, the English version of question paper is also provided. In case of doubt please refer to the English version of the same question.

विभाग I

तृतीय भाषा

प्रश्न 1 ते 3: साठी सूचना- पुढील उतारा काळजीपूर्वक वाचून त्याखाली विचारलेल्या प्रश्नांची अचूक उत्तरे निवडा.

प्रत्येक पिलाला त्याच्या वजनाइतके मासे रोज लागत. ती मोठी खादाड होती. खंड्या खाडी-नदीवरून मासे पकडून आणता आणता दुबळा झाला, हे जेव्हा तिच्या लक्षात आले, तेव्हा तीदेखील जवळपासच्या डबक्यातून मासे, बेडकी आणि खेकड्यांची पिले धरून आणी. कधी टोळ, तर कधी तुडतुडे पकडी. पिलांना चारी.

पिलांना नुकतेच पंख फुटू लागले होते. ती बिळाच्या रुंद तोंडाशी बसून आपल्या आईबापाची वाट पाहत. कधी तो मासा घेऊन येई. कधी ती चोचीत खेकड्याचे जिवंत पिलू घेऊन येई.

एकदा खेकड्याचे पिलू तिने पिलांपुढे ठेवले, तसा तो खेकडा बिळात तुरुतुरु धावू लागला. तशी ती पिले घाबरली. त्याला कोणीच चोच लावीना. तेव्हा त्यांची आई मदतीला धावली. तिने खेकड्याला चोचीने मारले, तेव्हा कुठे त्या पिलांनी खायला चोची पुढे केल्या. नाना प्रकारचे भक्ष्य कसे खावे याचे ती जणू त्यांना धडे देऊ लागली.

एकदा आईबरोबर पिले घराच्याच्या तोंडाशी बसली असता, तिने आकाशात उडणाऱ्या बहिरी ससाण्याची सावली पाहिली. लागोपाठ त्याचा कर्कश आक्रोश ऐकू आला. लगेच तिने पिलांना बिळात रेटले. स्वतःदेखील घाबरून तिने बिळात प्रवेश केला होता; कारण बहिरी ससाणा त्यांचा शत्रू होता.

कच्च्या कामासाठी जागा

1. वरील उताऱ्यात 'शिकवणे, अनुभव देणे' या अर्थाचा कोणता वाक्प्रचार आला आहे?

(1) धडे देणे

(2) आक्रोश करणे

(3) मदतीला धावणे

(4) पंख फुटणे

2. खंड्या पक्ष्याचा कुटुंबाचा वैरी कोण आहे?

(1) टोळ

(2) खेकडा

(3) बेडूक

(4) ससाणा

3. उताऱ्यातील वर्णानुसार असत्य विधान कोणते?

(1) खंड्याची पिले जिवंत खेकड्याला बघून घाबरली

(2) पिले व त्यांच्या आईला अन्न मिळवून देण्याची जबाबदारी एकट्या खंड्याची होती.

(3) प्रत्येक पिलाला रोज त्यांच्या वजनाइतके मासे लागत

(4) मासे, बेडूक, टोळ व तुडतुडे हे खंड्याचे अन्न आहे.

Space for Rough Work

प्रश्न 4 ते 6: साठी सूचना- पुढील सुसंगत वाक्यांचा परिच्छेद अर्थपूर्ण होण्यासाठी रिकाम्या जागी योग्य पर्यायांची निवड करा :

4. दिवस होते.

- | | |
|----------------|-------------|
| (1) निवडणुकीचे | (2) थंडीचे |
| (3) सुगीचे | (4) पावसाचे |

5. प्रत्येकजण आपापल्या

- (1) उमेदवाराच्या प्रचारात गुंतला होता.
- (2) घर दुरुस्तीच्या कामाला लागला होता.
- (3) शेकोटीचा आसरा घेत होता
- (4) पिकांची कापणी करण्यात गुंतला होता.

6. घरात आल्यावर बळीराजा खर्च्या अर्थाने सुखावला.

- | | |
|------------------------|-------------|
| (1) निवडलेले प्रतिनिधी | (2) पाणी |
| (3) धान्याच्या राशी | (4) बैलजोडी |

कच्च्या कामासाठी जागा

7. 'ही विहीर आजोबांनी बांधली आहे.' या वाक्यातील अधोरेखित शब्दाचा योग्य समानार्थी शब्द निवडा :

- (1) कूप (2) डबके
(3) अर्णव (4) तलाव

8. 'अनुयायी' या शब्दाचा योग्य विरुद्धार्थी शब्द पर्यायांतून निवडा : (अचूक उत्तराचे दोन पर्याय निवडा)

- (1) पुढारी (2) पाईक
(3) मालक (4) नायक

9. पुढीलपैकी अशुद्ध शब्द असणारा पर्याय कोणता?

- (1) सामूहिक (2) किर्ती
(3) हकीकत (4) गृहस्थ

10. पुढीलपैकी शुद्ध शब्द निवडा : (अचूक उत्तराचे दोन पर्याय निवडा)

- (1) परीक्षा (2) गरिबी
(3) चरीतार्थ (4) गनणा

Space for Rough Work

11. पुढीलपैकी विसंगत जोडी असणारा पर्याय निवडा :

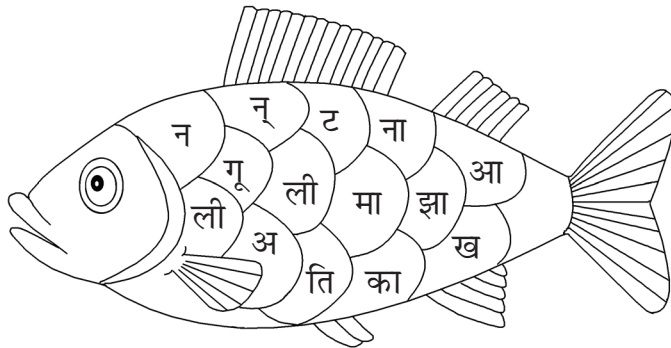
- (1) पाणपोई-वाटसरूनं पाणी पिण्यासाठी केलेली सोय
- (2) स्रोत - ज्यापासून मिळते तो मार्ग
- (3) वनचरे- वनात राहणारे प्राणी
- (4) आमराई-नारळांच्या झाडांची बाग

12. पुढील वाक्यपूर्तीसाठी योग्य वाक्यप्रचाराची निवड करा. सीमेवरील आपल्या भारतीय जवानांच्या

.....

- (1) जिवाची पर्वा नसणे
- (2) धैर्याला तोड नसणे
- (3) धारातीर्थी पडणे
- (4) धैर्याने तोंड देणे

13. सोबतच्या आकृतीत लपलेली अर्थपूर्ण म्हण ओळखून त्या म्हणीतील सहावे अक्षर पर्यायांतून निवडा :



- (1) ली
- (2) ट
- (3) आ
- (4) ख

कच्च्या कामासाठी जागा

14. दिलेल्या शब्दाला कोणत्या पर्यायातील शब्द जोडून योग्य जोडशब्द तयार होतो?

..... धाकट

(1) खड

(2) राकट

(3) धड

(4) पड

15. पुढीलपैकी कोणत्या पर्यायातील 'पद' हा शब्द 'पाऊल' या अर्थाने आला आहे?

(1) नर्तिकेने पदन्यास केला

(2) नवोदित गायकाने नाट्यपद गायले.

(3) शाळेचे मुख्यमंत्रीपद सूरजने मिळवले

(4) विनितने गणितातील पदावली सोडवली

16. 'सृष्टी, श्रावण, त्राण, हृदय, यादृच्छिक, नैऋत्य, गृहस्थ, अक्षरज्ञान' या शब्दांत एकूण किती जोडाक्षरे आली आहेत?

(1) आठ

(2) तेरा

(3) बारा

(4) दहा

Space for Rough Work

17. 'बघता बघता सातीजणी धारेला लागल्यासारख्या दिसल्या'. या वाक्यातील अधोरेखित शब्दाची जात ओळखा.

(1) शब्दयोगी अव्यय

(2) क्रियापद

(3) केवलप्रयोगी अव्यय

(4) क्रियाविशेषण अव्यय

18. सकर्मक क्रियापद असणारे वाक्य कोणते?

(1) आईने चिंतन केले.

(2) सानिका बागेत गेली

(3) वेदिकाला रंगीत फुगा आवडला

(4) माकड झाडावर सरसर चढले

19. पुढीलपैकी निश्चितपणे पुल्लिंगी नाम कोणते?

(1) जागा

(2) शेंगा

(3) धागा

(4) रांगा

कच्च्या कामासाठी जागा

20. पुढीलपैकी भाववाचक नाम असलेला पर्याय ओळखा : (अचूक उत्तराचे दोन पर्याय निवडा)

- (1) नातेवाईक (2) सुंदरता
(3) औदार्य (4) प्रसंग

21. पुढीलपैकी अनेकवचनी नाम असणारा पर्याय निवडा

- (1) मांजर (2) चादर
(3) नजर (4) डोंगर

22. पुढील वाक्यात कोणते विरामचिन्ह द्यायचे राहिले आहे?

तिच्या हातांना बँडेज होते पण ती हसत होती.

- (1) स्वल्पविराम (2) अर्धविराम
(3) अपूर्णविराम (4) उद्गारचिन्ह

23. पुढीलपैकी अपूर्ण वर्तमानकाळाचे वाक्य कोणते?

- (1) फटाक्यांमुळे हवेतलं प्रदूषण वाढते.
(2) फटाक्यांमुळे हवेतलं प्रदूषण वाढत असे.
(3) फटाक्यांमुळे हवेतलं प्रदूषण वाढत असते
(4) फटाक्यांमुळे हवेतलं प्रदूषण वाढत आहे.

Space for Rough Work

24. 'कोटि कोटि बळकट बाहू

जगन्नाथ-रथ ओढून नेऊ'

या ओळी कोणी रचल्या आहेत?

- (1) शंकर वैद्य
- (2) बा. भ. बोरकर
- (3) वसंत बापट
- (4) प्रकाश गोसावी

25. 'लग्नाची बेडी' या नाटकाचे नाटककार कोण?

- (1) रा. ग. गडकरी
- (2) प्र. के. अत्रे
- (3) पु. ल. देशपांडे
- (4) वि.वा. शिरवाडकर

कच्च्या कामासाठी जागा

Section II

Intelligence Test

26. The teacher instructed the students in the specific manner. He said to clap at 1, run at 3, stop at 5, sit at 7. Observe the following series instructions. How many times does it happen that a child clapped before sitting?

1 3 5 7 1 5 7 3 1 7 5 1 3 7 1 7 7 3 7 1 5 1 3 1 7 1 5 1 7 3 1 7

- (1) 6 (2) 5
(3) 4 (4) 3
27. Form a meaningful word using o, n, l, e, d, k, e, w, g.

Find the first adjacent letter to the middle letter.

(Choose two correct options)

- (1) q (2) w
(3) e (4) g

Space for Rough Work

28. Alphabet series.

A B C D E F G H I J K L M N O P Q R S T U V W X Y

from the given alphabetical series, if PEN = 35; BALLPEN = 62 then PAPER = ?

- (1) 56 (2) 54
(3) 52 (4) 51

29. From the given alphabetical series, if DO = 33; COME = 68 then RUN = ?

- (1) 22 (2) 23
(3) 24 (4) 25

30. R G N D M H G N D G H N G N N G R G N M H G N D G N M

In the given letter series, how many times has it happened that 'N' follows 'G' but 'R' does not come before 'G' ?

- (1) 3 times (2) 4 times
(3) 5 times (4) 7 times

कच्च्या कामासाठी जागा

Instructions for Q. Nos. 31 to 35 : Select the term from the given alternatives which does not fit in the group.

31. (1) Chaitra – Gudhi Padwa

(2) Ashwin – Dussehra

(3) Bhadrapad – Nag Panchami

(4) Falgun – Holi Pornima

32. (1) AU

(2) IM

(3) GO

(4) EP

33. (1) 1210

(2) 3795

(3) 8129

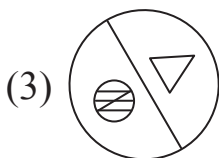
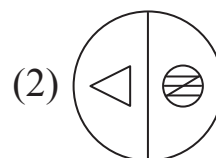
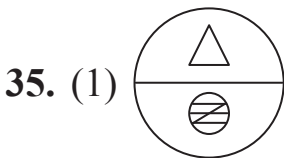
(4) 5831

34. (1) 0.025

(2) 0.0049

(3) 0.0025

(4) 0.000049



Space for Rough Work

36. There is a specific relation between the first term and the second term. The same relation exists between third and fourth term. Select the correct alternative. (Choose two correct options)

Q' Henry : The last leaf : : Shakespeare : ?

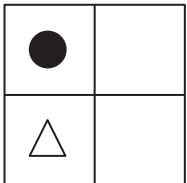
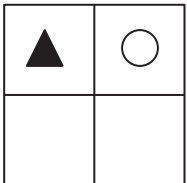
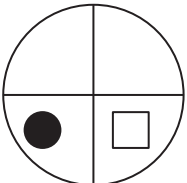
- (1) Gulliver's Travels
- (2) Macbeth
- (3) Robinson Crusoe
- (4) As you like it

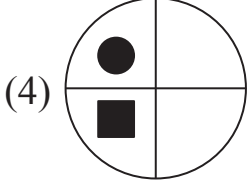
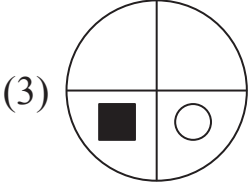
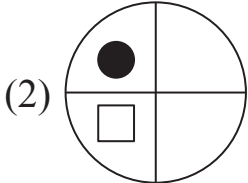
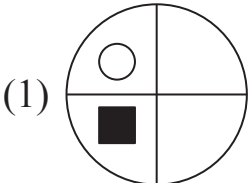
37. The average of the ages of Ram, Shyam and John five years before was 16 years. What will be the average of their ages after 5 years?

- (1) 21 yrs
- (2) 22 yrs
- (3) 26 yrs
- (4) 30 yrs

कच्च्या कामासाठी जागा

Instructions for Q. Nos. 38 to 41 : There as a specific relation between the first term and the second term. The same relation exists between third and the fourth term. Select the correct alternative.

38.  ·  ∴  · ?



39. 14 : 2 :: 39 : ?

(1) 4

(2) 3

(3) 5

(4) 6

40. 17 : 72 :: 16 : ?

(1) 58

(2) 56

(3) 61

(4) 68

Space for Rough Work

41. AD : D 5 A :: E G : ?

(1) E 12 G

(2) G 12 E

(3) G 11 E

(4) G 10 E

Instructions for Q. Nos. 42 to 45 : Which alternative will replace the question mark '?' in the following series.

42. 0, 1, 5, 14, 30, 55, 91, ?

(1) 130

(2) 140

(3) 150

(4) 155

43. 143, 120, 99, 80, 63, ?

(1) 47

(2) 48

(3) 50

(4) 51

44. *५*+×५*+×**+×??

(1) ५*

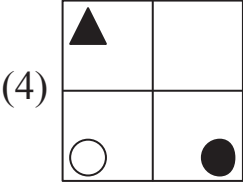
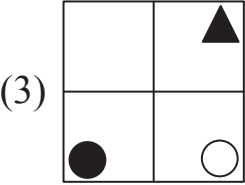
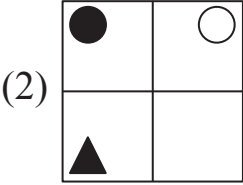
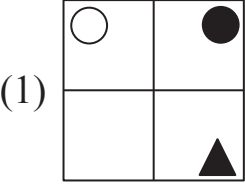
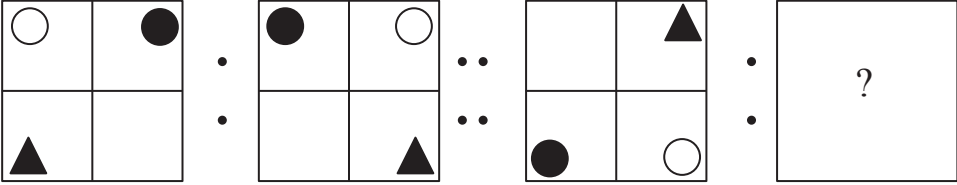
(2) **५

(3) ५+

(4) ५*

कच्च्या कामासाठी जागा

45. Question Figures



Instructions for Q. Nos. 46 to 47 : Find the odd term.

46. 7, 12, 17, 21, 27, 32, 37, 41, 47, 52. (Select two correct options)

(1) 21

(2) 17

(3) 41

(4) 32

Space for Rough Work

47. ACBC, EGFH, IKJL, MONP, PQRS

(1) PQRS

(2) ACBD

(3) EGFH

(4) MONP

48. If in certain code language,

$$49 \star \star \star = 40$$

$$60 \square \square = 15$$

$$20 \star = 17$$

18 \square = 9, then 100 \square $\star \star$ = ? (Choose two correct options)

(1) 88 \square

(2) 88 \star

(3) 47 \star

(4) 47 \square

49. In a certain code language LOAD is written as 121514 and GOAT is written as 715120. How will you write 'MAKE' in the same code language?

(1) 135111

(2) 513111

(3) 131511

(4) 131115

कच्च्या कामासाठी जागा

53. 17_7_175_0175_017_7


(1) 50775

(2) 50175

(3) 55771

(4) 70570

Instructions for Q. Nos. 54 to 56 : Observe the pyramid and select the correct alternative to replace the question mark '?'.



54. 2, 1, 3 : 2, 4, 3 :: 1, 7, 14 : ?

(1) 6, 3, 9

(2) 6, 7, 8

(3) 6, 13, 4

(4) 6, 9, 13

कच्च्या कामासाठी जागा

55. 5, 8, 13, 9, : 7, 11, 15, 12, :: 2, 8, 15, 9 : ?

(1) 5, 11, 3, 12

(2) 6, 13, 4, 9

(3) 5, 15, 6, 1

(4) 3, 6, 10, 14

56. 2, 8, 14, 5 : 12, 15, 2, 14 :: 3, 5, 8, 13 : ?

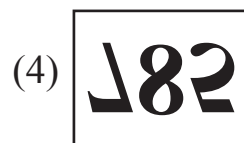
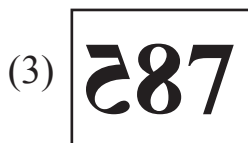

(1) 13, 8, 11, 5

(2) 13, 14, 10, 6

(3) 6, 12, 3, 11

(4) 10, 1, 12, 8

57. Select the correct alternative that is the mirror image of the question figure.

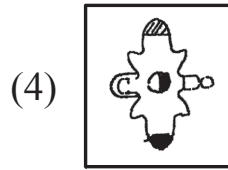
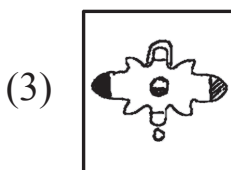
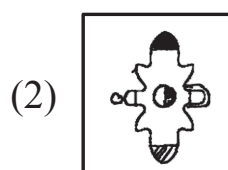
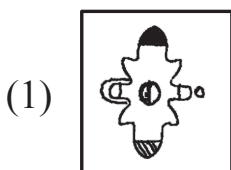



Space for Rough Work

58. Select the correct alternative that is the water image of the question figure.



59. Select the correct alternative that is a mirror image of the question figure.



कच्च्या कामासाठी जागा

60. A river flows with a speed of 4 km/hr and a boat sails at the speed of 12 km/hr in still water. If the boat takes 2 hour to cover some distance, moving downstream then how much time it will require to cover the same distance moving upstream?

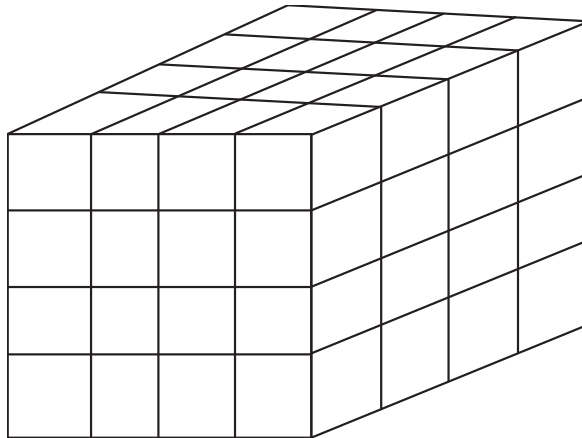
(1) 3 hrs

(2) 4 hrs

(3) 6 hrs

(4) 8 hrs

Instructions for Q. Nos. 61 to 62 : A solid cube ($4 \times 4 \times 4$) cm is painted green from all the sides. The cube is then cut at 1 cm to form smaller cubes of side 1 cm each. Now answer the following questions.



61. How many cubes have only two faces green ?

(1) 8

(2) 12

(3) 24

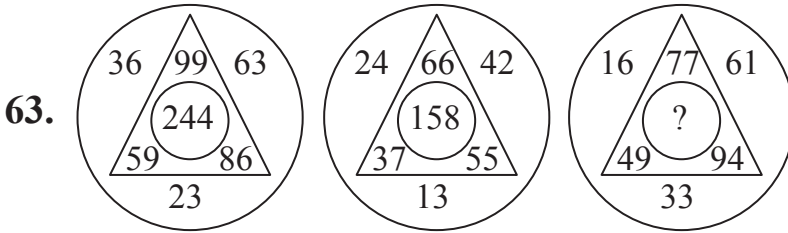
(4) 48

Space for Rough Work

62. How many cubes which have no coloured faces?

- (1) 8 (2) 12
(3) 24 (4) 18

Instructions for Q. Nos. 63 to 64 : Identify the rule by which the numbers are written in the following questions and select the correct alternative that will replace the question mark.



- (1) 110 (2) 210
(3) 220 (4) 230

64.

36	12	252
392	810	80
150	?	2

- (1) 512 (2) 564
(3) 576 (4) 586

कच्च्या कामासाठी जागा

65. Manoj is standing second last in a row. Ramesh is 3 places ahead of him. Suresh is standing on 7th place before Ramesh. Suresh is an 9th place in the row. How many students are there in the row?

(1) 18

(2) 19

(3) 20

(4) 21

66. Rajesh went 7 km to west and went 4 km after turning to left. Again he turned to left and went 3 km then he went 9 km to North and turned to right After turning he went 4 km and then stopped. Find the distance from the origin.

(1) 13 km

(2) 7 km

(3) 9 km

(4) 5 km

67. 13 January 2008 was Sunday. Then, in that year, which day occurred 53 times? (Choose two correct options)

(1) Sunday

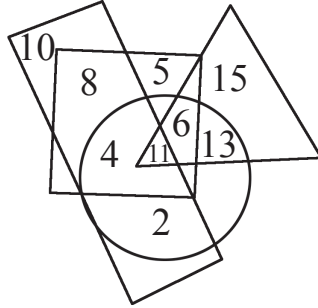
(2) Wednesday

(3) Monday

(4) Tuesday

Space for Rough Work

68. In the Venn diagram, Hindi speaking persons are shown in triangle, Marathi speaking persons are shown in circle, English speaking are shown in rectangle and Telugu speaking are shown in square. Find the number of persons who speak all 4 languages ?



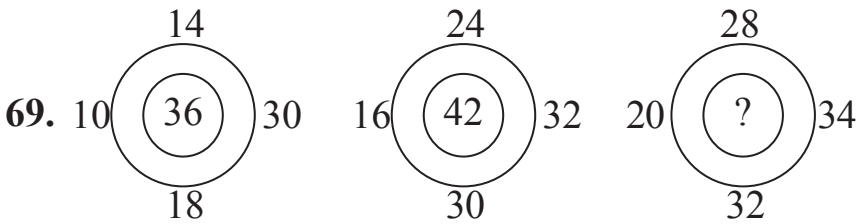
(1) 4

(2) 6

(3) 11

(4) 13

Instructions for Q. Nos. 69 to 70 : Observe the numbers given below and select the correct alternative to replace '?'



(1) 48

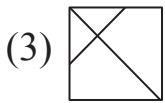
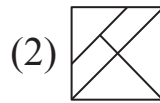
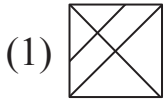
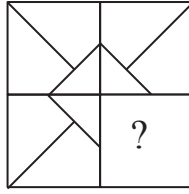
(2) 50

(3) 52

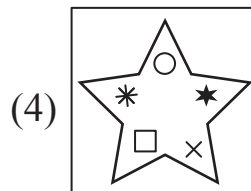
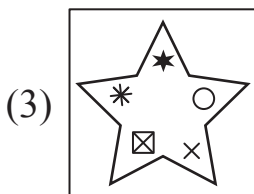
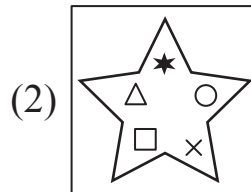
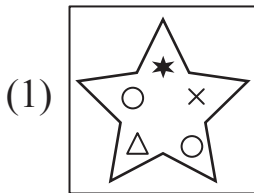

(4) 54

कच्च्या कामासाठी जागा

72.

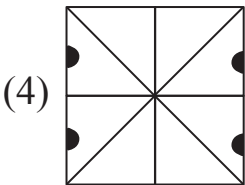
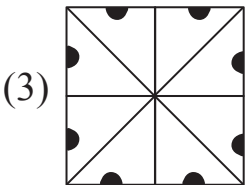
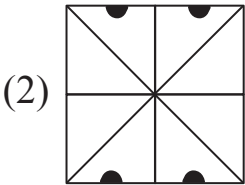
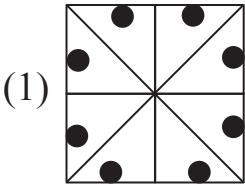
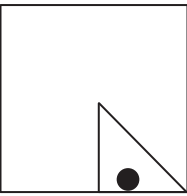


73. Select the replica of the question figure.



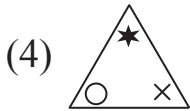
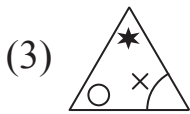
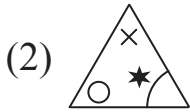
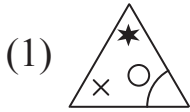

कच्च्या कामासाठी जागा

74. The folded figure of a paper is shown in the question figure. If it is unfolded what will it look like? Select the correct alternative.



Space for Rough Work

75. A complicated figure is given in the question figure. From the given alternatives identify the figure hidden in the question figure.



कच्च्या कामासाठी जागा

Space for Rough Work

Space for Rough Work